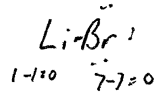
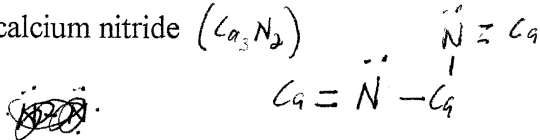
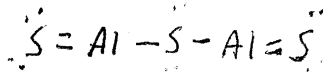
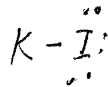
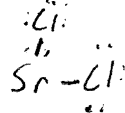
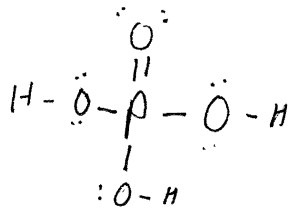
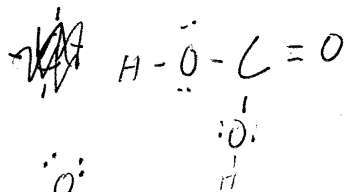
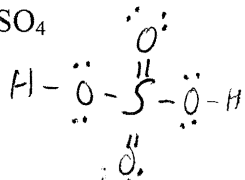


Write the correct Lewis structure for:

1) magnesium oxide (MgO)2) lithium bromide ($LiBr$)3) calcium nitride (Ca_3N_2)4) aluminum sulfide (Al_2S_3)5) potassium iodide (KI)6) strontium chloride ($SrCl_2$)7) H_3PO_4 8) H_2CO_3 9) H_2SO_4 10) Nitric acid (HNO_3)